



Download Toppr - India's best learning app for classes 5th to 12th

360° learning with our adaptive platform



Online Classes

Learn for free with short videos and live classes



Adaptive Practice

Practice smart with questions created for your unique needs



Mock Tests

Be exam ready by solving all India tests and previous years' papers



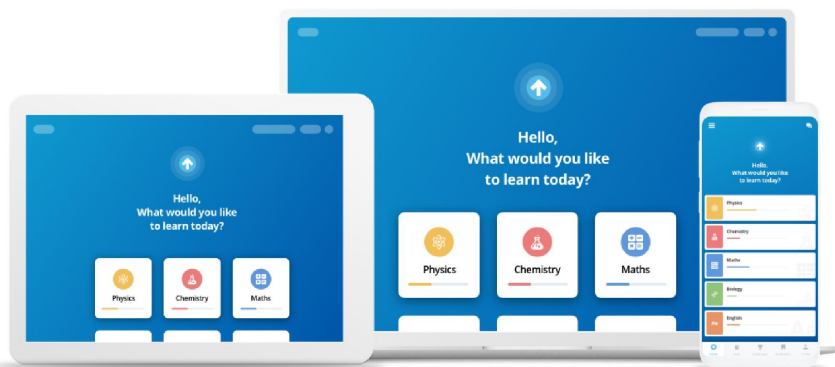
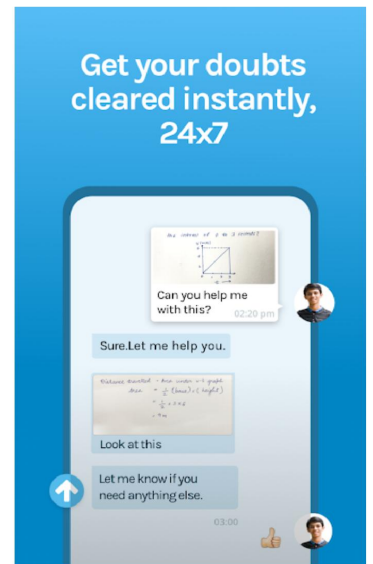
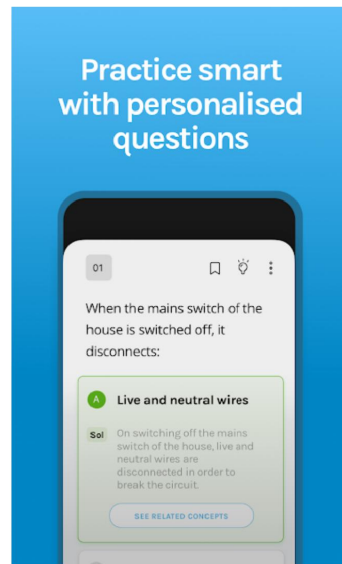
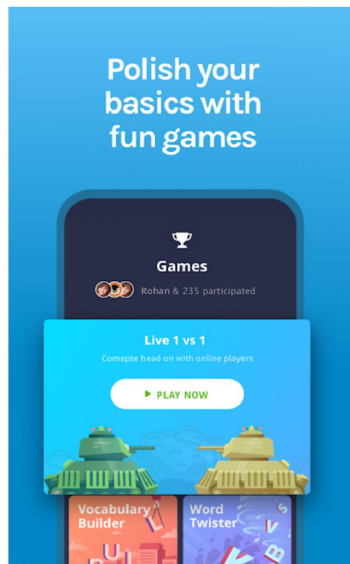
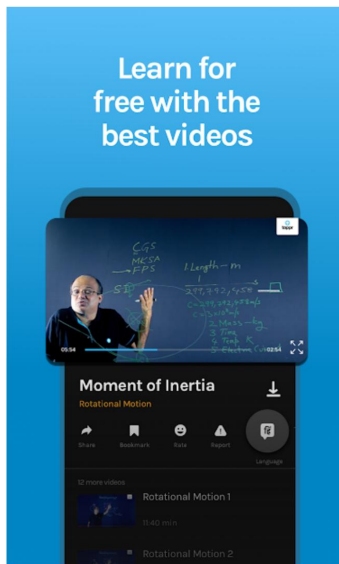
Live Doubts

Chat with tutors and get your doubts resolved instantly, 24x7



Live Classes

Learn concepts and get tips from the best teachers with free Live Classes



Download the app for
FREE now

GET A 5-DAY FREE TRIAL



9,184,321
HAPPY STUDENTS



492,461,127
QUESTIONS ATTEMPTED



3,986,828
TESTS TAKEN



8,017,171
DOUBTS ANSWERED

NCERT Solutions for Class 11 Subjectwise

- [Class 11 Mathematics](#)
- [Class 11 Physics](#)
- [Class 11 Biology](#)
- [Class 11 Chemistry](#)
- [Class 11 English](#)
- [Class 11 Accountancy](#)
- [Class 11 Business Study](#)
- [Class 11 Economics](#)

#424911

Topic: Photorespiration

By looking at a plant externally can you tell whether a plant is C_3 or C_4 ? Why and how?

Solution

One cannot distinguish whether a plant is C_3 or C_4 by observing its leaves and other morphological features externally. Unlike C_3 plants, the leaves of C_4 plants have a special anatomy called Kranz anatomy and this difference can only be observed at the cellular level. For example, although wheat and maize are grasses, wheat is a C_3 plant, while maize is a C_4 plant.

#424912

Topic: Photorespiration

By looking at which internal structure of a plant can you tell whether a plant is C_3 or C_4 ? Explain.

Solution

The leaves of C_4 plants have a special anatomy called Kranz anatomy. This makes them different from C_3 plants. Special cells, known as bundle-sheath cells, surround the vascular bundles. These cells have a large number of chloroplasts. They are thick-walled and have no intercellular spaces. They are also impervious to gaseous exchange. All these anatomical features help prevent photorespiration in C_4 plants, thereby increasing their ability to photosynthesise.

#424913

Topic: Photorespiration

Even though a very few cells in a C_4 plant carry out the biosynthetic Calvin pathway, yet they are highly productive. Can you discuss why?

Solution

The productivity of a plant is measured by the rate at which it photosynthesizes. The amount of carbon dioxide present in a plant is directly proportional to the rate of photosynthesis. C_4 plants have a mechanism for increasing the concentration of carbon dioxide. In C_4 plants, the Calvin cycle occurs in the bundle-sheath cells. The C_4 compound (malic acid) from the mesophyll cells is broken down in the bundle-sheath cells. As a result, CO_2 is released. The increase in CO_2 ensures that the enzyme RuBisCo does not act as an oxygenase, but as a carboxylase. This prevents photorespiration and increases the rate of photosynthesis. Thus, C_4 plants are highly productive.

#424914

Topic: Photorespiration

RuBisCO is an enzyme that acts both as a carboxylase and oxygenase. Why do you think RuBisCO carries out more carboxylation in C_4 plants?

Solution

The enzyme RuBisCo is absent from the mesophyll cells of C_4 plants. It is present in the bundle-sheath cells surrounding the vascular bundles. In C_4 plants, the Calvin cycle occurs in the bundle-sheath cells. The primary CO_2 acceptor in the mesophyll cells is phosphoenol pyruvate – a three-carbon compound. It is converted into the four-carbon compound oxaloacetic acid (OAA). OAA is further converted into malic acid. Malic acid is transported to the bundle-sheath cells, where it undergoes decarboxylation and CO_2 fixation occurs by the Calvin cycle. This prevents the enzyme RuBisCo from acting as an oxygenase.

#424915

Topic: Site of photosynthesis

Suppose there were plants that had a high concentration of Chlorophyll b, but lacked chlorophyll a, would it carry out photosynthesis? Then why do plants have chlorophyll b and other accessory pigments?

Solution

Chlorophyll-a molecules act as antenna molecules. They get excited by absorbing light and emit electrons during cyclic and non-cyclic photophosphorylation. They form the reaction centres for both photosystems I and II. Chlorophyll-b and other photosynthetic pigments such as carotenoids and xanthophylls act as accessory pigments. Their role is to absorb energy and transfer it to chlorophyll-a. Carotenoids and xanthophylls also protect the chlorophyll molecule from photo-oxidation. Therefore, chlorophyll-a is essential for photosynthesis.

If any plant were to lack chlorophyll-a and contain a high concentration of chlorophyll-b, then this plant would not undergo photosynthesis.

#424916

Topic: Site of photosynthesis

Why the colour of a leaf kept in the dark frequently is yellow or pale green? Which pigment do you think is more stable?

Solution

Leaf has a green colour pigment known as chlorophyll. The production of the chlorophyll pigment is essential for photosynthesis is directly proportional to the amount of light available. In the absence of light, the production of chlorophyll a molecule stops and they degenerate. This changes the colour of the leaf gradually to light green. During this process, the xanthophyll and carotenoid pigments become predominant, causing the leaf to become yellow. These pigments are more stable as light is not essential for their production. They are always present in plants.

#424917

Topic: Site of photosynthesis

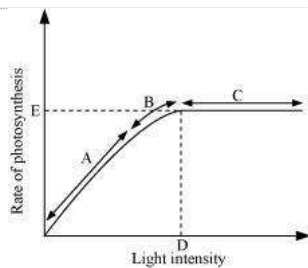
Look at leaves of the same plant on the shady side and compare it with the leaves on the sunny side or compare the potted plants kept in the sunlight with those in the shade. Which of them has leaves that are darker green? Why?

Solution

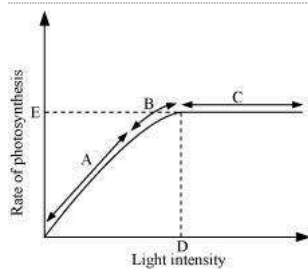
Light is a limiting factor for photosynthesis. Leaves get lesser light for photosynthesis when they are in shade. Therefore, the leaves or plants in shade perform lesser photosynthesis as compared to the leaves or plants kept in sunlight.

In order to increase the rate of photosynthesis, the leaves present in shade have more chlorophyll pigments. This increase in chlorophyll content increases the amount of light absorbed by the leaves, which in turn increases the rate of photosynthesis. Therefore, the leaves or plants in shade are greener than the leaves or plants kept in the sun.

#424919

Topic: Factors affecting photosynthesis**Figure 13.10**

- (a) At which point/s (A, B or C) in the curve is light a limiting factor?
- (b) What could be the limiting factor/s in region A?
- (c) What do C and D represent on the curve?

Solution

- (a) Generally, light is not a limiting factor. It becomes a limiting factor for plants growing in shade or under tree canopies. In the given graph, light is a limiting factor at the point where photosynthesis is the minimum. The least value for photosynthesis is in region A. Hence, light is a limiting factor in this region.
- (b) Light is a limiting factor in region A. Water, temperature, and the concentration of carbon dioxide could also be limiting factors in this region.
- (c) Point D represents the optimum point and gives the light intensity at which the maximum photosynthesis is recorded. The rate of photosynthesis remains constant after this point, even though the intensity of light increases in region C.

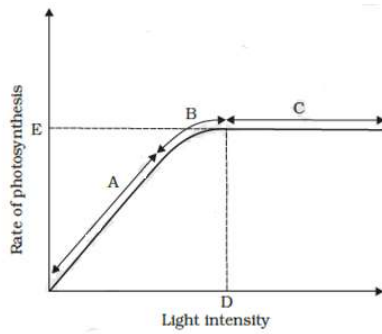
#424920

Topic: Factors affecting photosynthesis

What could be the limiting factor/s in region A?

Solution

The region is the initial phase of growth where the photosynthesis is slow due to limiting factors. Light is a limiting factor in region A. Water, temperature, and the concentration of carbon dioxide could also be limiting factors in this region.



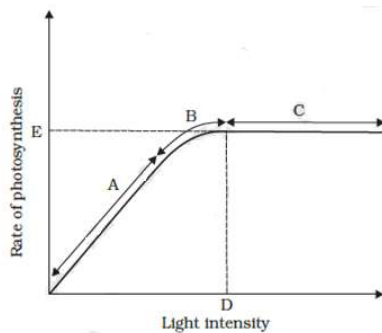
#424921

Topic: Factors affecting photosynthesis

What do C and D represent on the curve?

Solution

Point D represents the optimum point and gives the light intensity at which the maximum photosynthesis is recorded. The rate of photosynthesis remains constant after this point, even though the intensity of light increases in region C.



#424922

Topic: Photorespiration

Give comparison between the following:

- (a) C_3 and C_4 pathways
- (b) Cyclic and non-cyclic photophosphorylation
- (c) Anatomy of leaf in C_3 and C_4 plants.

Solution

(a)

C_3 pathways	C_4 pathways
1. The primary acceptor of CO_2 is RUBP – a six-carbon compound.	1. The primary acceptor of CO_2 is phosphoenol pyruvate – a three-carbon compound.
2. The first stable product is 3-phosphoglycerate.	2. The first stable product is oxaloacetic acid.
3. It occurs only in the mesophyll cells of the leaves.	3. It occurs in the mesophyll and bundle-sheath cells of the leaves.
4. It is a slower process of carbon fixation and photorespiratory losses are high.	4. It is a faster process of carbon fixation and photorespiratory losses are low.

(b)

Cyclic photophosphorylation	Non-cyclic photophosphorylation
1. It occurs only in photosystem I.	1. It occurs in photosystems I and II.
2. It involves only the synthesis of ATP.	2. It involves the synthesis of ATP and $NADPH_2$.
3. In this process, photolysis of water does not occur. Therefore, oxygen is not produced.	3. In this process, photolysis of water takes place and oxygen is liberated.
4. In this process, electrons move in a closed circle.	4. In this process, electrons do not move in a closed circle.

(c)

Anatomy of leaf in C_3 plants	Anatomy of leaf in C_4 plants
1. Bundle-sheath cells are absent.	1. Bundle-sheath cells are present.
2. RuBisCo is present in the mesophyll cells.	2. RuBisCo is present in the bundle-sheath cells.
3. The first stable compound produced is 3-phosphoglycerate – a three-carbon compound.	3. The first stable compound produced is oxaloacetic acid – a four-carbon compound.
4. Photorespiration occurs.	4. Photorespiration does not occur.